

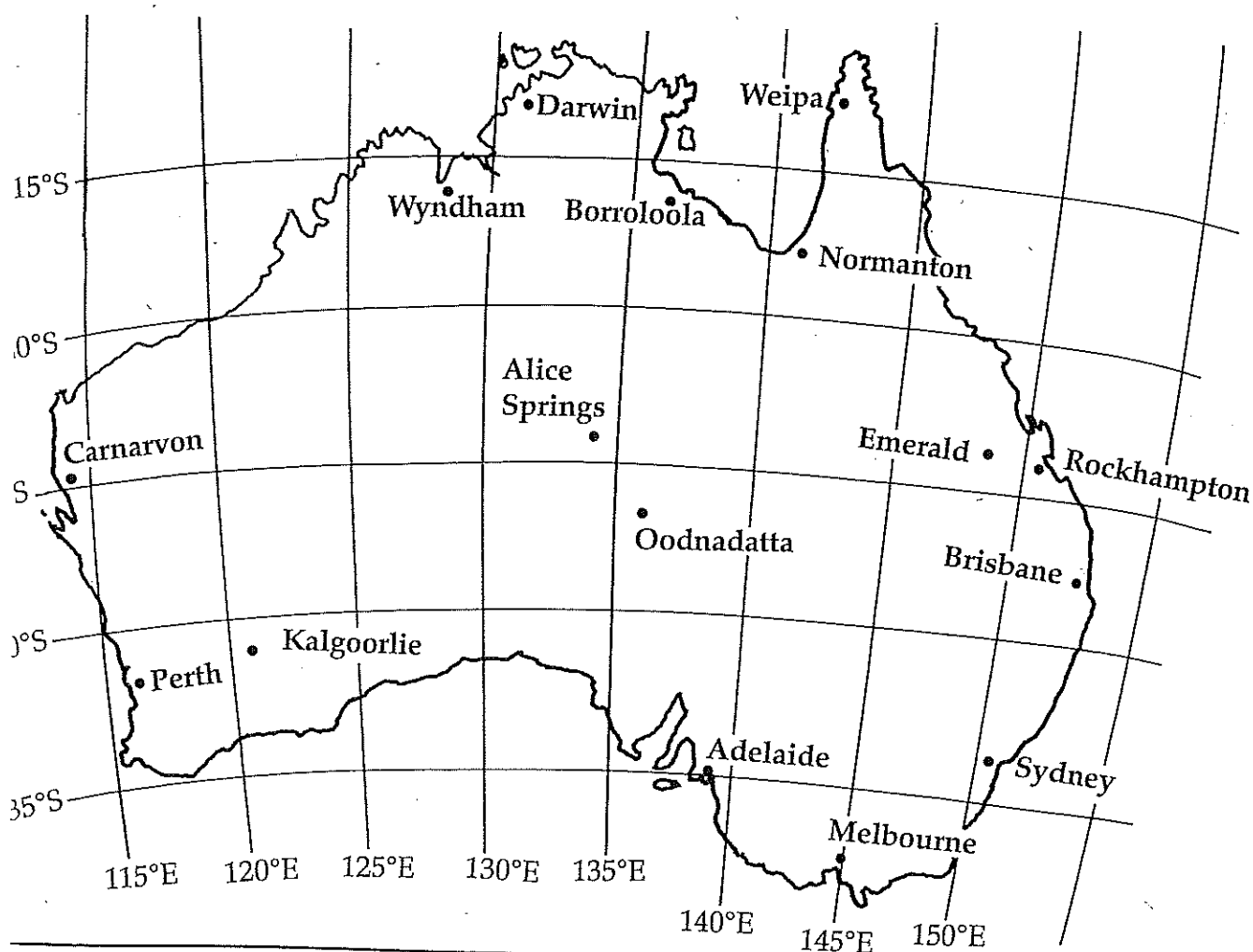



Latitude and Longitude in Australia

Name _____

Use the latitude and longitude map of Australia to tell the location of each city or town shown below.

Town or City	Latitude	Longitude	Town or City	Latitude	Longitude
Adelaide	_____	_____	Melbourne	_____	_____
Alice Springs	_____	_____	Normanton	_____	_____
Borroloola	_____	_____	Oodnadatta	_____	_____
Brisbane	_____	_____	Perth	_____	_____
Carnarvon	_____	_____	Sydney	_____	_____
Darwin	_____	_____	Weipa	_____	_____
Emerald	_____	_____	Wyndham	_____	_____
Kalgoorlie	_____	_____			

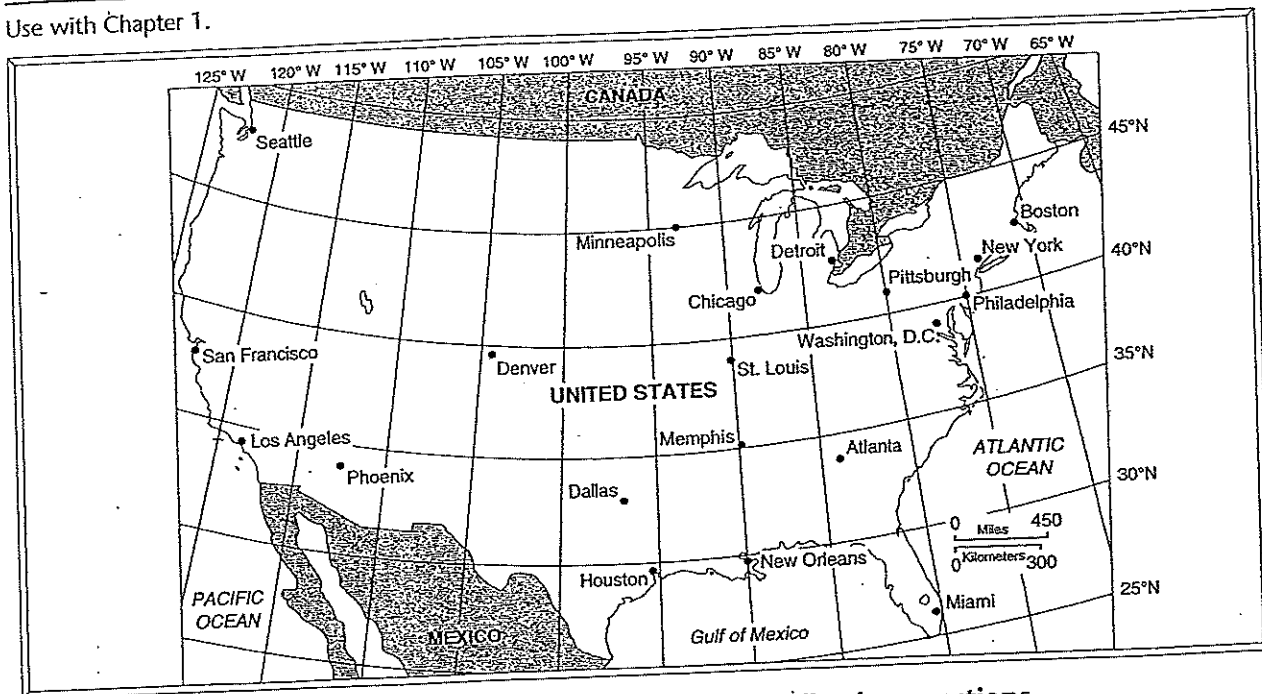




Geography Skills Activity 5

Using a Grid

Use with Chapter 1.



Use the map of the United States above to answer the following questions.

1. In what direction do lines of latitude run? _____
2. In what direction do lines of longitude run? _____
3. What city is located along 45° N latitude? _____
4. What three cities are located closest to 90° W longitude? _____

5. If you were at 30° N latitude and 75° W longitude, you would be in the _____.
6. What city is located at about 30° N latitude and 95° W longitude? _____
7. What city is located at about 38° N latitude and 122° W longitude? _____
8. What city is located at about 47° N latitude and 122° W longitude? _____
9. What city is located at about 42° N latitude and 71° W longitude? _____
10. What body of water is located at 25° N latitude and 90° W longitude? _____
11. Atlanta is located at about _____ N latitude and _____ W longitude.
12. Phoenix is located at about _____ N latitude and _____ W longitude.